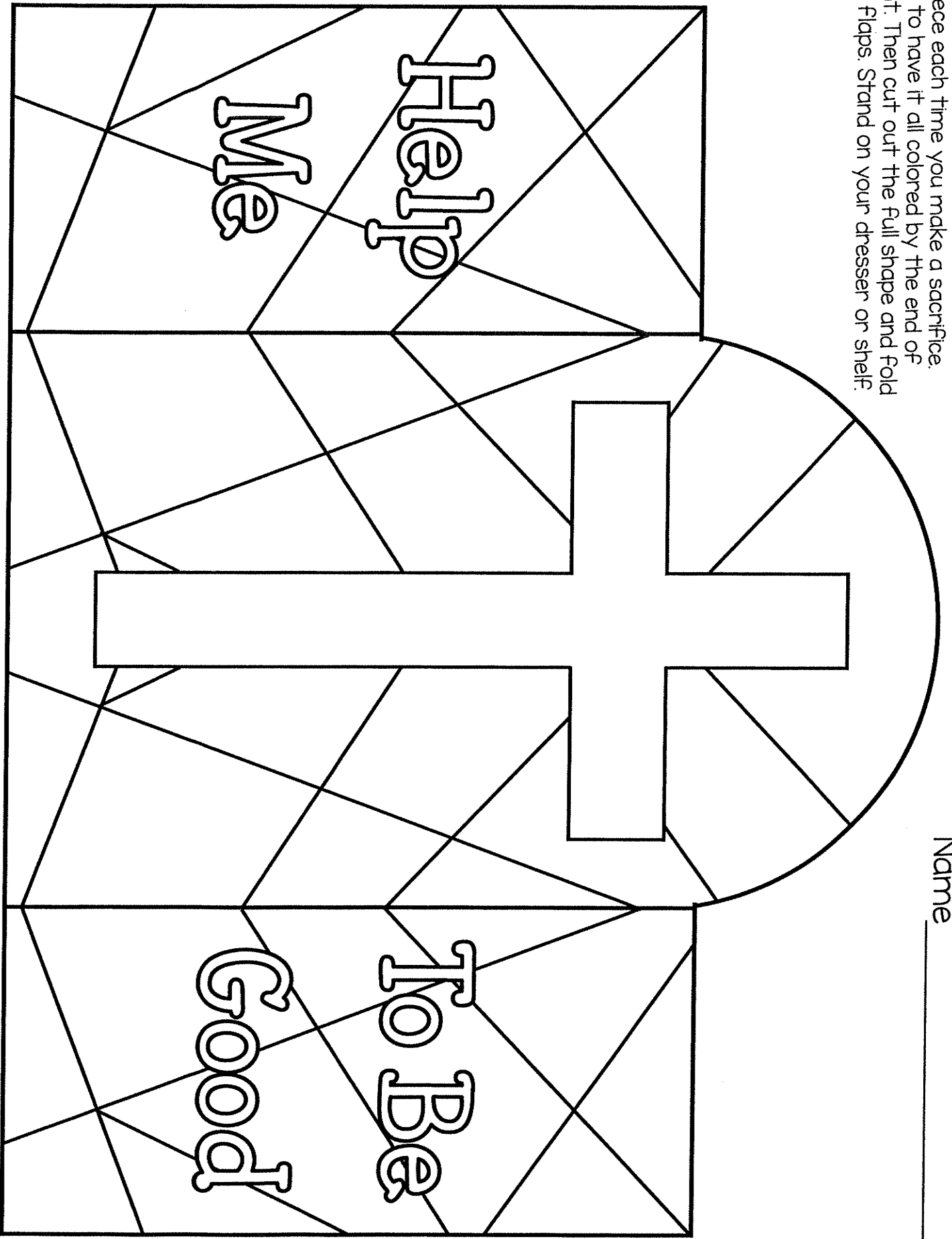
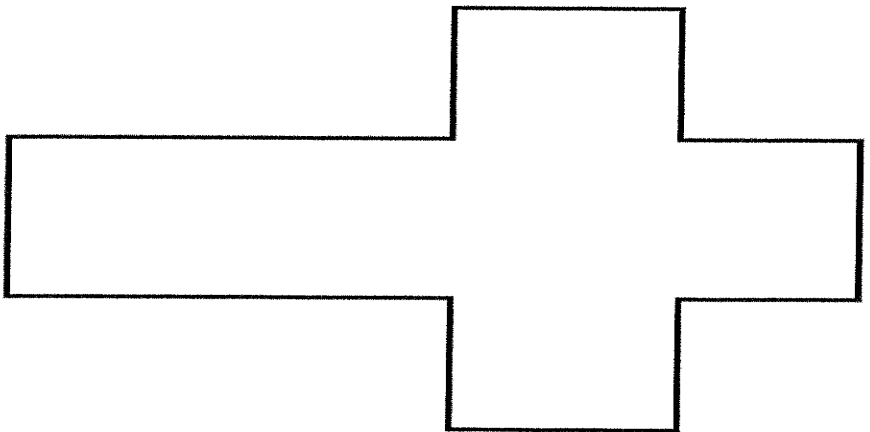
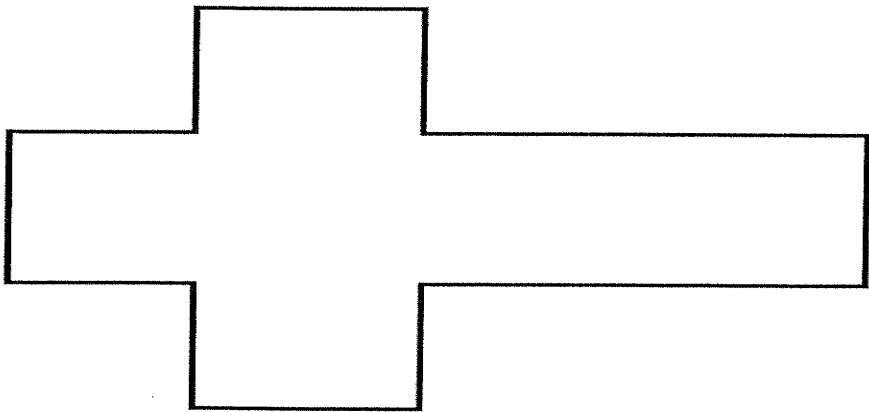
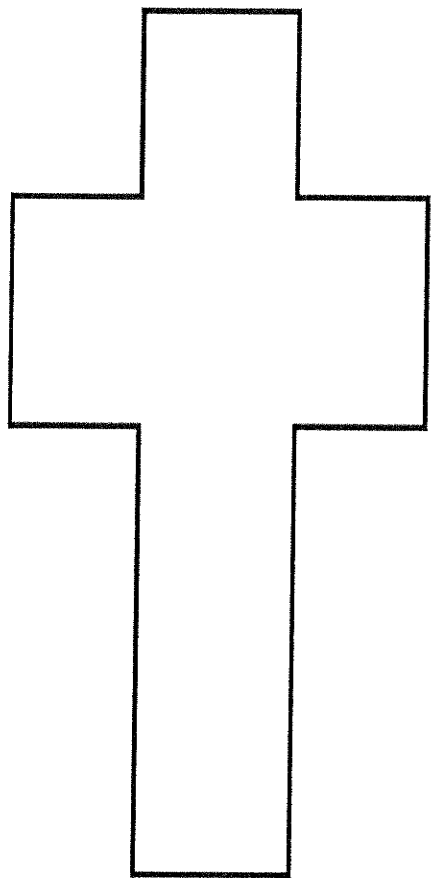
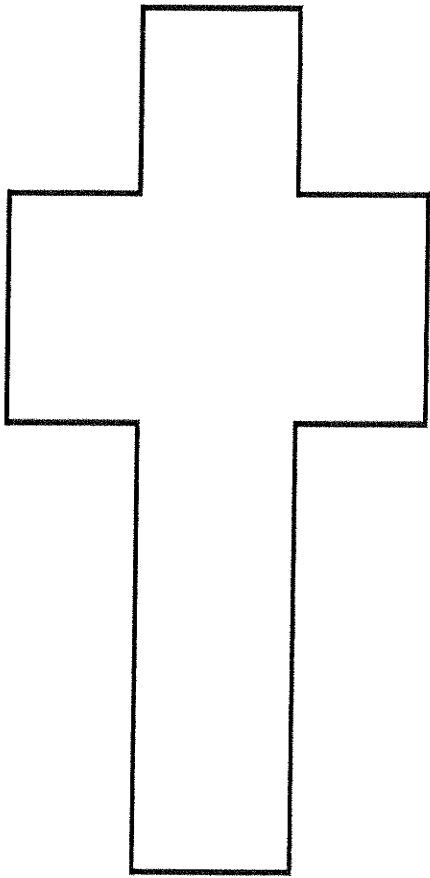
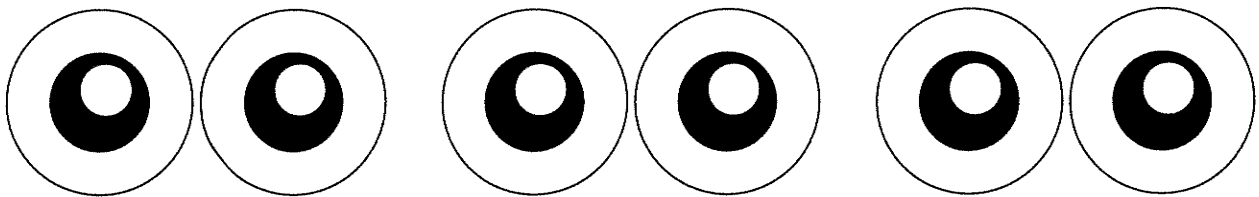
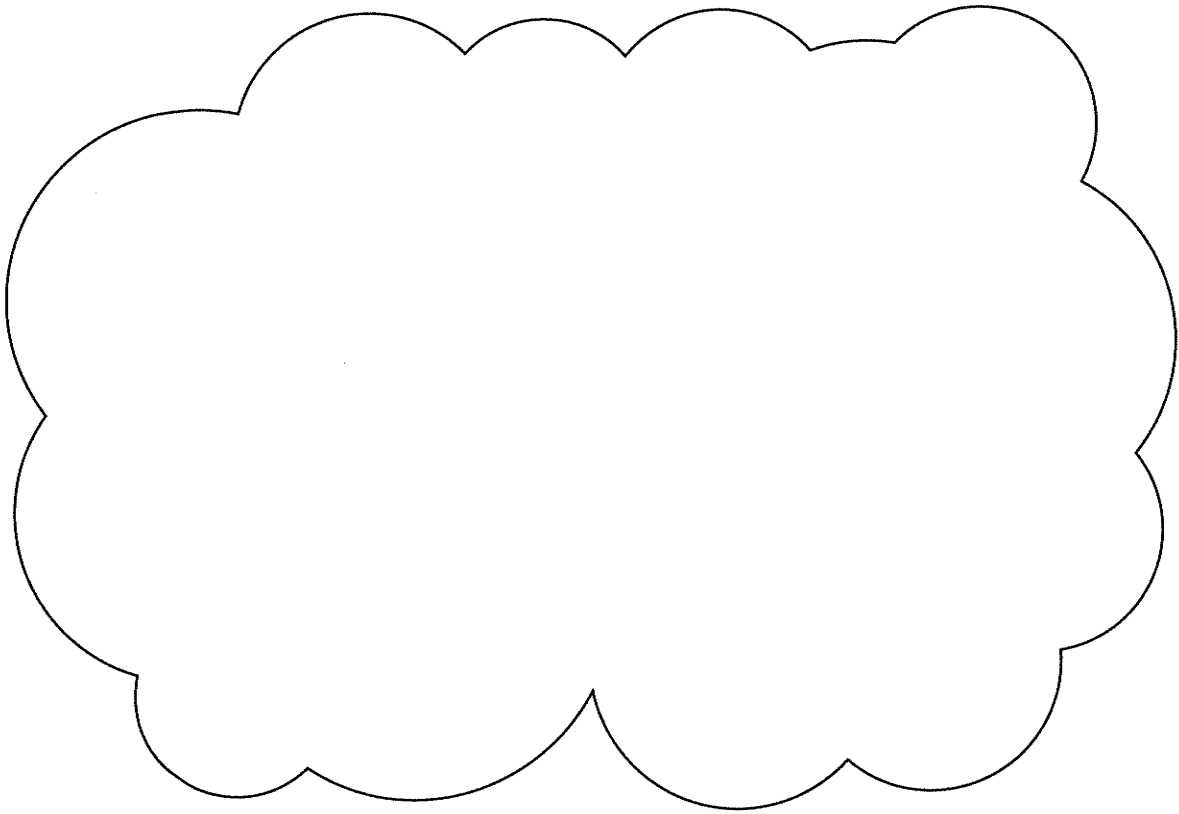



Directions: Print on cardstock. Color a piece each time you make a sacrifice. Try to have it all colored by the end of Lent. Then cut out the full shape and fold the flaps. Stand on your dresser or shelf.

Name _____

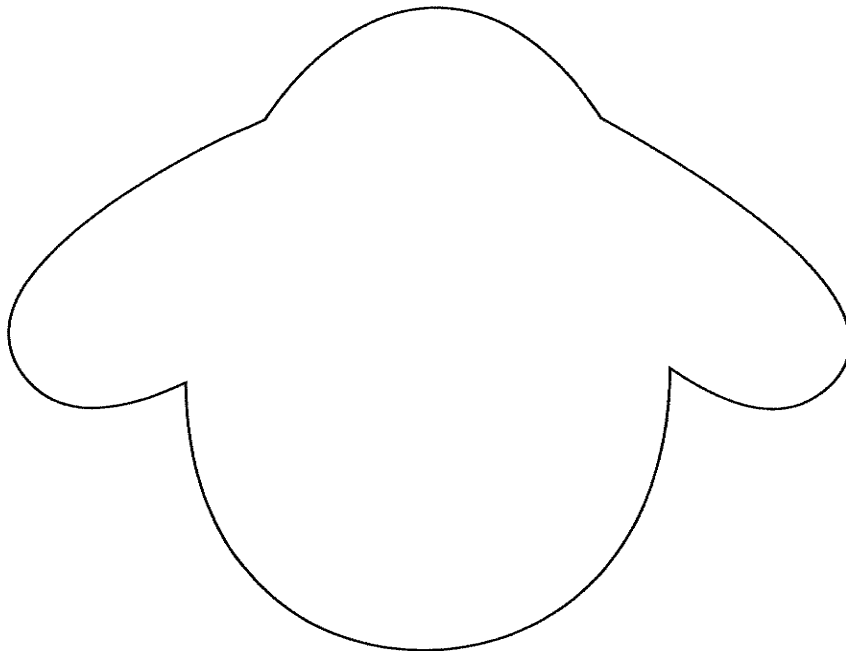
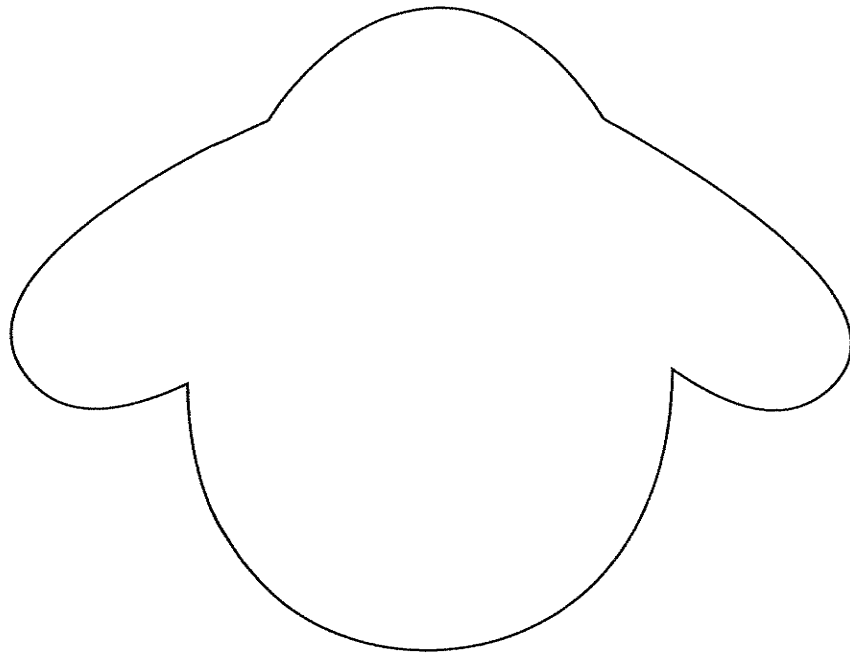




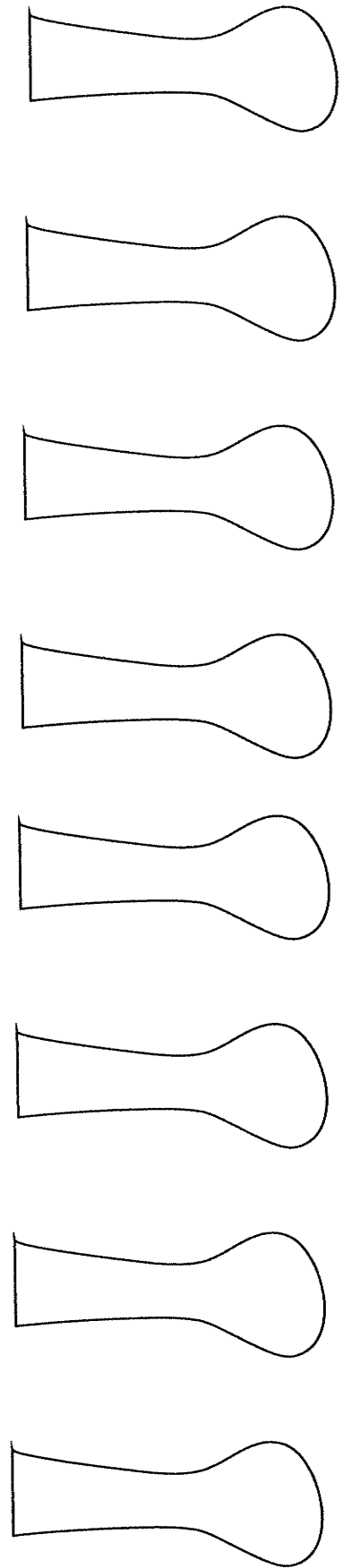


print on white paper





print on black paper



Name: _____

T-REX TRUE OR FALSE

Use the information in the text to color the correct T-REX to answer the true or false question.

1. T-Rex was an herbivore and only ate plants.



TRUE



FALSE

2. T-Rex was on earth 65 million years ago.



TRUE



FALSE

3. T-Rex was 53 feet long.



TRUE



FALSE

4. The T-rex walked and ran on two legs.



TRUE



FALSE

5. The T-Rex lived in United States and Mexico.



TRUE



FALSE

6. The Tyrannosaurus rex was one of the largest of the land predator dinosaurs.



TRUE



FALSE


Write one new thing you learned about the T-Rex.

Name: _____

TYRANOSAURUS REX

Read the passage. Use the passage to answer the questions. Use the correct color crayon to show where you found your answer in the text.

The T-Rex or Tyrannosaurus Rex was a ferocious looking dinosaur! The T. Rex roamed the planet during the late Cretaceous Period 65 million years ago, in what's now the USA and Canada. The Tyrannosaurus rex was one of the largest of the land predator dinosaurs. The T-rex measured up to 43 feet long and weighed as much as 7.5 tons. The T-Rex was a carnivore and used his huge jaw and sharp teeth to eat meat from other dinosaurs. The T-Rex walked and ran on two legs and had two small but strong arms.



1. How many years ago did T-Rex roam?



2. What did the T-Rex eat?



Color a T-Rex each time you read the text!



All About the Tyrannosaurus Rex
by:

Fact #1:


Fact #2:

Fact #3:

Mister Bones: Dinosaur Hunter Grammar Test

Circle the adjectives in each sentence. There are TWO adjectives in each sentence.

1. Barnum Brown wears a red bowtie and a brown hat.
2. The dinosaur with short arms and long legs is the T-Rex.
3. The old bones were hidden under the dry soil.
4. The scary dinosaur ran into the tall trees.
5. The dinosaur's sharp teeth scared the little girl.



Noun and Adjective Sort

Noun – a person, place, or thing

Adjective – a word that describes a noun

tall	Mr. Barnum	dinosaur	little	red
boy	brown	desert	one	tree

NOUN	ADJECTIVE

Correct the sentences. Write the new sentence on the line.

mr barnum likes to dig for dinosaur bones


do you like to look at dinosaur bones at the museum

Name _____

1st Read What is the problem asking?



Joy has 15 beads.
She gives 4 beads to Amy.
She gives 5 beads to Mya.
How many beads does Joy have left?



1. Underline the question.

.....

2nd Read What facts do you know?

2. Circle how many beads Joy has to start.

.....

3. Circle how many beads Joy gives to Amy and Mya.

.....

3rd Read How can you solve the problem?

4. How many beads does Joy have left?

Think: This math story has two parts.

First, Joy gives 4 beads to Amy.

$$\underline{\quad} - \underline{\quad} = \underline{\quad}$$


Then, she gives 5 beads to Mya.

$$\underline{\quad} - \underline{\quad} = \underline{\quad}$$

Joy has beads left.



How do you know what numbers to use in each number sentence?

 Read Each Problem Closely

1st Read What is the problem asking?

2nd Read What facts do I know?

3rd Read How can I solve the problem?

PRACTICE

Read > Plan > Solve > Check

5. There are 17 kids outside.
8 of the kids play tag.
How many kids do not play tag?

_____ kids do not play tag.

6. Lola sees 12 birds in a tree.
A noise scares 5 birds away.
Then 2 more fly away.
How many birds are left?

There are _____ birds left.

7. Alex has 13 toy trucks.
He has 6 toy cars.
How many more trucks
than cars does Alex have?


Alex has _____ more trucks than cars.

Name _____ Date _____

Give the best answer for each question.


1. Write the difference.

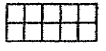
$$16 - 9 = \underline{\quad}$$



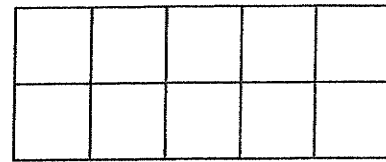
2. Cross out dots to show the amount being taken away.

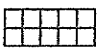
$$17 - 8 = ?$$



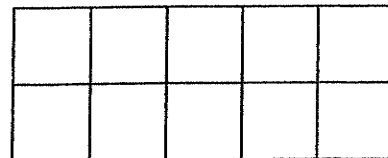
3. Subtract. Use a  and ● to help.

$$\begin{array}{r} 11 \\ - 5 \\ \hline \end{array}$$



4. Subtract. Use a  and ● to help.

$$\begin{array}{r} 12 \\ - 9 \\ \hline \end{array}$$



5. Fill in the missing numbers.

$$\begin{aligned} 11 - 7 &= \underbrace{11 - 1} - \underline{\quad} \\ &= 10 - \underline{\quad} = \underline{\quad} \end{aligned}$$

So, $11 - 7 = \underline{\quad}$.

6. Subtract. Add to check.

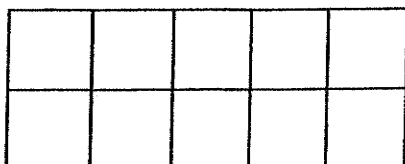
$$14 - 5 = \underline{\quad}$$

$$\underline{\quad} + \underline{\quad} = \underline{\quad}$$

7. Fill in the missing numbers.

$\begin{array}{r} 7 \\ -7 \\ \hline \end{array}$	$\begin{array}{r} 8 \\ -7 \\ \hline \end{array}$	$\begin{array}{r} 9 \\ -7 \\ \hline \end{array}$	$\begin{array}{r} 10 \\ -7 \\ \hline \end{array}$	$\begin{array}{r} 11 \\ -7 \\ \hline \end{array}$	$\begin{array}{r} 12 \\ -7 \\ \hline \end{array}$	$\begin{array}{r} 13 \\ -7 \\ \hline \end{array}$	$\begin{array}{r} 14 \\ -7 \\ \hline \end{array}$

8. Hanna caught 13 ladybugs.
 Ruby caught 7 ladybugs.
 How many more ladybugs
 did Hanna catch than Ruby?
 Use the ten-frame to help.



- 5
- 6
- 7
- 8

9. Find the difference.


$$\begin{array}{r} 16 \\ - 8 \\ \hline \end{array}$$

10. Ruth has 15 red cups and
 9 blue cups. How many
 more red cups does
 Ruth have?

- 24
- 9
- 6
- 5

11. Find the difference.

$$\begin{array}{r} 14 \\ - 9 \\ \hline \end{array}$$



12. Use these numbers.

8 9 17

Write the fact family.

_____ = _____

_____ = _____

_____ = _____

_____ = _____

13. Write the missing whole.
Check with addition.

_____ - 6 = 8

14. Circle the equations that are true.

$12 - 3 = 8$




$13 - 5 = 8$

$6 + 9 = 15$

$18 - 9 = 9$

15. What number will make the addition sentence true?

$9 + \underline{\hspace{1cm}} = 13$

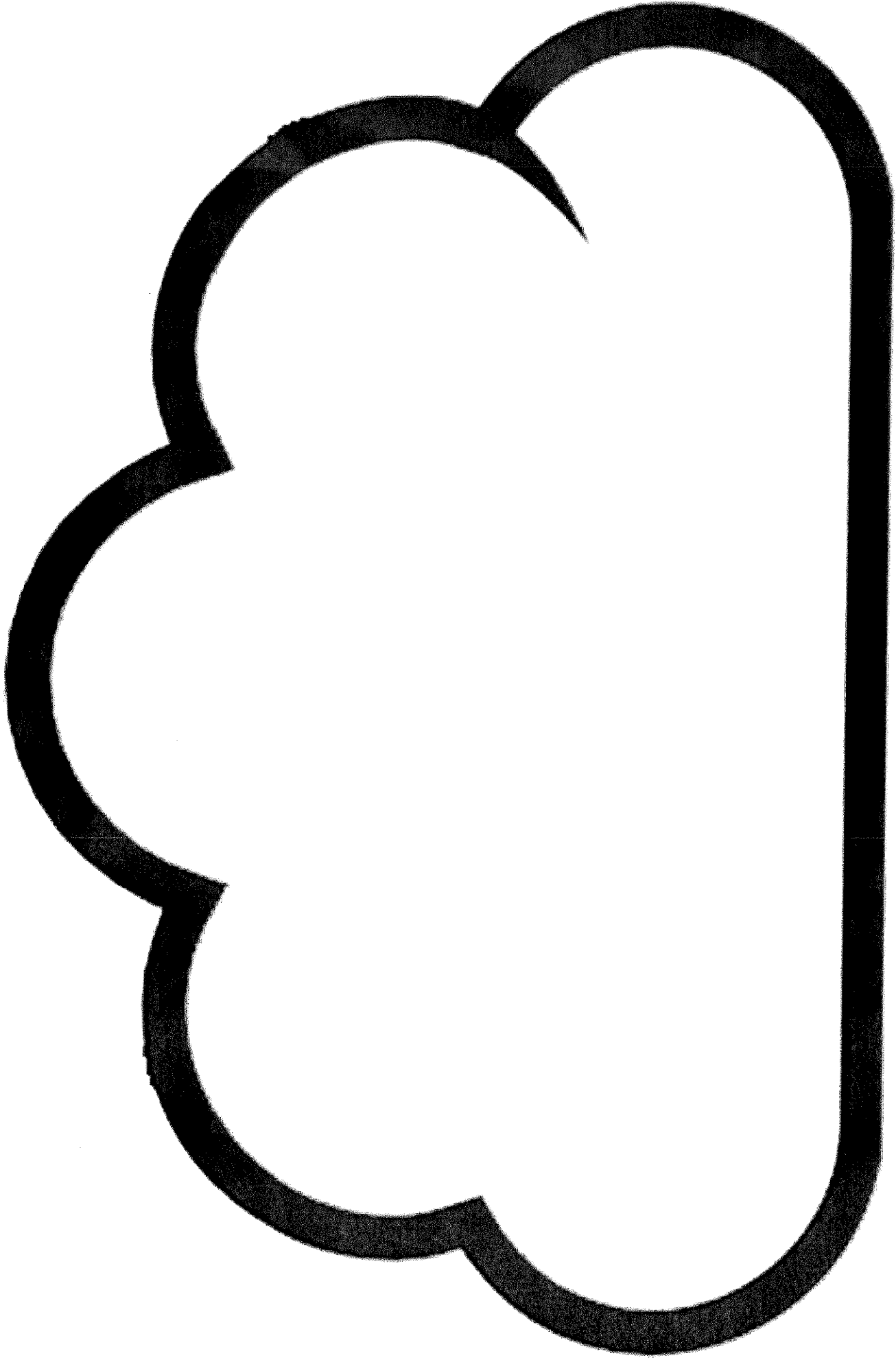
16. Juan opens a bag of .
He sees that there are 16  in the bag.
He puts 7  in the fruit bowl. How many are left in the bag?

6

9

10

16



<http://learninginspain.blogspot.com.es/>

© Lita Lita