

AFTER A RAINSTORM

Read the story.

Eric was walking to school.
There were puddles by the road.
A car went past.
Eric looked surprised.



Circle the correct answers.

1. What was Eric doing?

walking to school

walking to the park

2. Why did Eric look surprised?

He did not know the driver.

The car splashed water on him.


3.

What do you think Eric will do next?

A RACE IN THE RAIN

Read the story.

It was Play Day for the garden animals.
The turtle and snail decided to race.
First, they had to find a safe place.
They found a trail near the gate.
Wait! It is beginning to rain.
Waves of water washed out the trail.
The race never took place.



Answer the questions.

1. Who do you think would have won the race?

2. Which is the best title for the story?
Put a check mark by your answer.

_____ The Trail

_____ Play Day

_____ Near the Gate

_____ Waves of Water

3.

Write about animals you would like to see race. Be sure to tell the reader why you would like to see the animals race.

Name: _____

#hw 5/19

LOST AND FOUND

Read the story.

Jill went shopping for shoes.

She lost her purse.

Later, a call came from the lost-and-found desk.

Jill looked happy after the call.

Circle the correct answers.

1. What was Jill doing?

shopping for shoes

shopping for groceries

2. What did Jill lose?

her hat

her purse

3. Why do you think Jill looked happy?

Her purse had been found.

The store had the shoes she wanted.



What do you think Jill will do next?

Spelling Sort

aw

au

Extra ELA

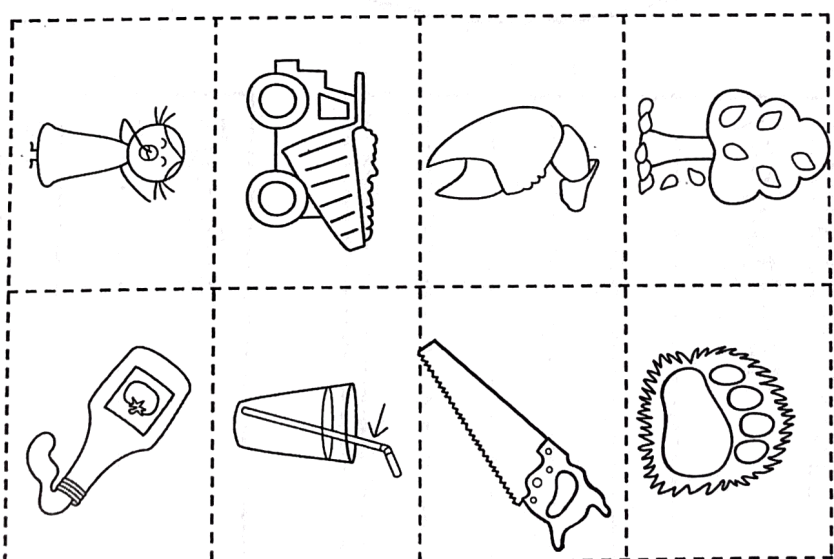
straw	caught	crawl	dawn
daughter	shaw	saw	laugh
paw	crawl	cause	yawn
Autumn	sauce	lawn	haul

Name: _____ au & aw

Cut & Paste

1. autumn	2. yawn
3. claw	4. haul
5. paw	6. sauce
7. straw	8. saw

© Ms. Tran 2015



© Ms. Tran 2015

Biography Graphic Organizer

Name: _____

Early Life:

Who?

Birth Date:

Death Date:

Character Traits
(adjectives):

What is he/she famous
for?

Fun Facts:

X _____

X _____

X _____

X _____

X _____

X _____



Inventor

Invention

What does it do?

How does it make your life easier?

PAYING WITH COINS



Name: _____

extra

Count by tens, fives, and ones.




10¢ 15¢ 16¢



Count the money. Write the price.


1.






2.






3.





4.








MATCHING AMOUNTS

Name: _____
Match.

extra



COUNTING QUARTERS, DIMES, NICKELS & PENNIES


Names: _____

extra

1 quarter is equal to 25 pennies.



1 quarter = 25¢



Count the money. Write the amount.

1.



¢

2.



¢

3.



¢

4.




¢

COUNTING MONEY

Name: _____

Circle the coins needed to buy the toys.
The first one is done for you.

extra



Name: _____

*hw 5/19.



- A. 3¢
- B. 15¢
- C. 30¢



- A. 3¢
- B. 15¢
- C. 30¢



- A. 20¢
- B. 25¢
- C. 30¢




- A. 25¢
- B. 27¢
- C. 40¢



_____¢ + _____¢ + _____¢ + _____¢ + _____¢ = _____¢

6. Count on. Write the total amount.



_____, _____, _____, _____, _____, _____, _____



- A. 31¢
- B. 36¢
- C. 40¢

8. Frank has 1 quarter, 1 dime, and 1 penny. How much money does he have?

* hw 5/19

9. Nora has 4 dimes and a nickel. She wants to buy an item that costs 45¢. Which sentence is true?

- A. Nora has enough money.
- B. Nora needs 5¢ more.
- C. Nora needs 10¢ more.



- A. 50¢
- B. 55¢
- C. 60¢

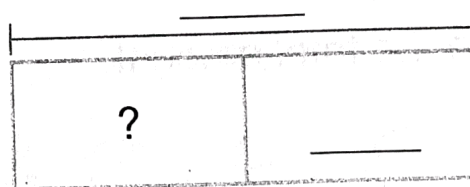


- A. 90¢
- B. 95¢
- C. \$1

12. Which value is between 30¢ and 40¢?

- A. 3 dimes and 2 pennies
- B. 4 dimes and 1 penny
- C. 4 dimes and 3 pennies

13. Brook has 80¢. She buys an apple. Now she has 50¢. How much did the apple cost?



The apple cost _____¢.

$$\underline{\hspace{1cm}} \text{ ¢} = \underline{\hspace{1cm}} \text{ ¢} + \underline{\hspace{1cm}} \text{ ¢}$$

14. Caleb has 2 quarters and 2 nickels. He wants to buy a banana for 55¢. Does Caleb have enough money? Tell how you know.

Caleb _____ have enough money.
