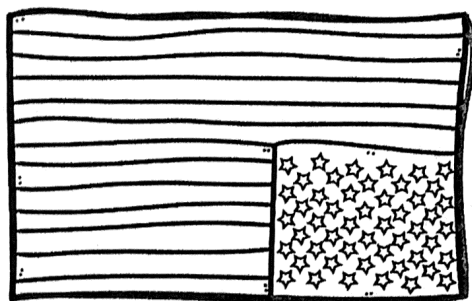


Date: _____

By: _____



OUR FLAG

WORD SEARCH

A	F	L	A	G	P	O	L	E	B
W	C	D	S	F	B	M	A	D	P
H	E	S	T	R	I	P	E	S	L
I	Q	B	A	C	Y	C	V	E	E
T	B	F	R	D	B	U	R	E	D
E	P	W	S	L	F	B	O	Y	G
D	S	Y	M	B	O	L	A	D	E
A	R	X	T	N	B	U	R	C	K
Z	D	F	L	A	G	E	A	K	F
A	M	E	R	I	C	A	G	T	A

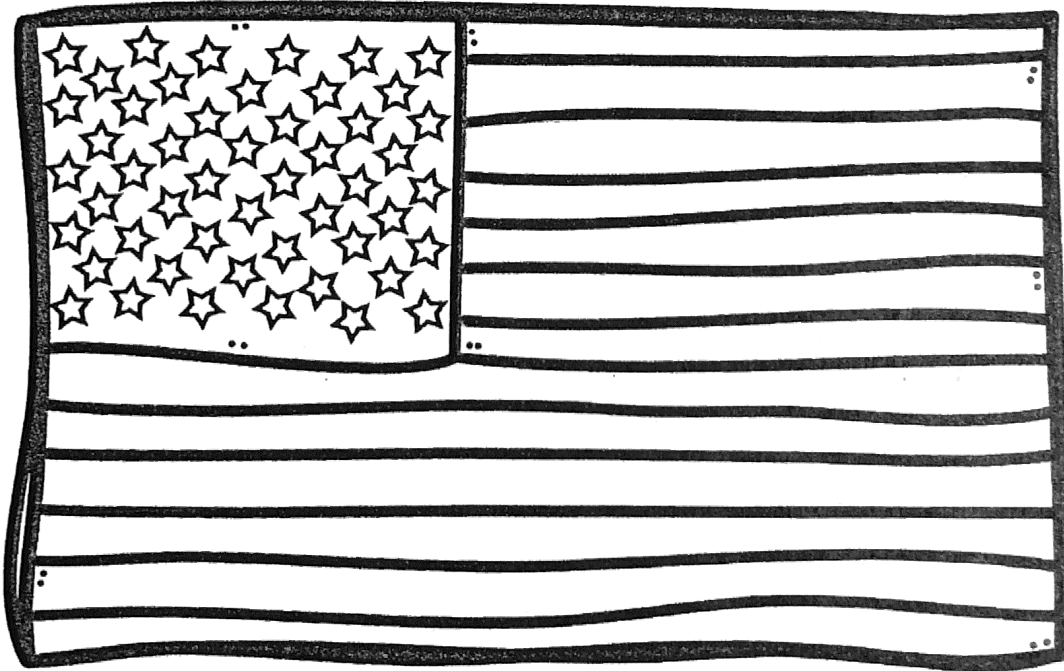
flag red white blue flagpole
America symbol stripes stars pledge

FLAG FACTS

The American flag is one of our national symbols. It is red, white, and blue. Our flag has seven red stripes and six white stripes. That's 13 stripes all together! Each stripe represents one of the 13 original colonies. The American flag also has 50 white stars on a field of blue. Each star represents one of the 50 states.

THE FLAG

Color the flag.



FLAG

THE PLEDGE

Directions: Use the words from the word bank to fill in The Pledge of Allegiance.

indivisible justice liberty pledge

"I _____ allegiance to the flag of the United States of America, and to the Republic for which it stands, one Nation under God, _____, with _____ and _____ for all."

FLAG COLORS

Did you know that the colors chosen for our flag have special meanings? They do!

Red stands for courage.
White means goodness.
Blue represents justice.

THE

FLAG RULES

There are many ways that you can show respect to our American flag. By following these simple rules as you handle the flag, you can show respect for our flag and our country. Here are a few of the rules:


1. Raise the flag quickly and lower it slowly.
2. Do not let the flag touch the ground.
3. Always fold the flag in a special way. When folded, the flag makes a triangle shape with just the stars showing.

IN YOUR COMMUNITY

List three places where you see the American flag in your own community.

1. _____
2. _____
3. _____

Draw one place here.



AMERICAN

My Dad

My dad's job

My favorite thing to do with my dad

My dad's superpower

I love Dad more than

My dad always laughs when

I love my dad because

I love my dad because

My dad always laughs when


I love Dad more than

My dad's superpower

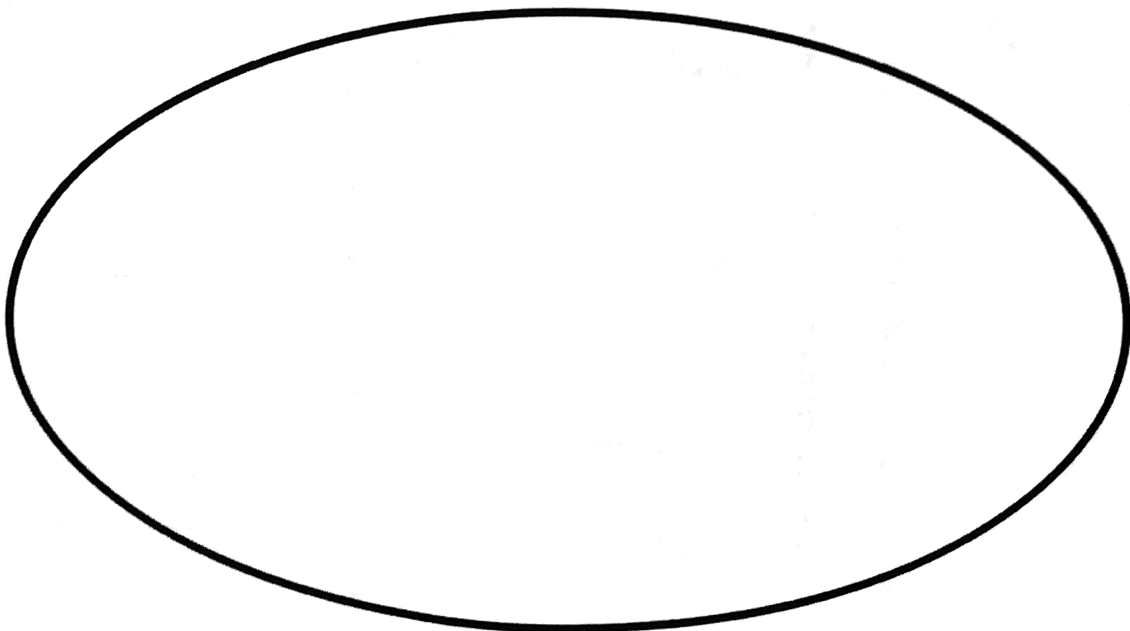




My favorite thing to do with my dad

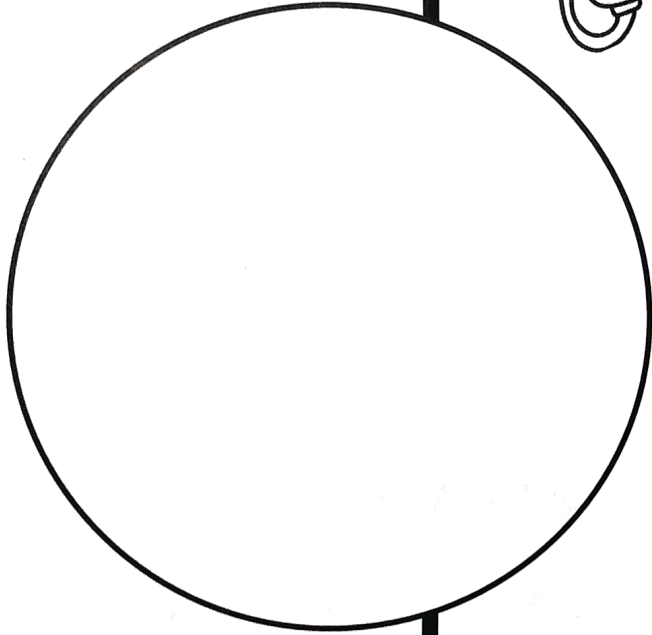
My dad's job



My Dad



Crab
CRAFT










Name _____ Date _____

Give the best answer for each question.




1. Ms. Erin's students tallied their favorite types of pets. If everyone answered once, how many students are in Ms. Erin's class?

Favorite Pets		
Pet	Tally	Total
		9
		12
		4




_____ students total





2. Tally the different types of insects. Fill in the chart. (Remember to cross off each picture as you count it.)



Insects		
Type	Tally	Total
		
		
		

3. The chart shows the beads on Sasha's necklace. Which necklace belongs to Sasha?



Color of Beads		
Bead	Tally	Total
		2
	III	8
		2

- 
- 
- 
- 

4. Mia tallied how many children had lost teeth since the start of the school year.

Part A

Fill in the totals.




Losing Teeth		
Teeth Lost	Tally	Total
0	I	
		
	II	




Part B

How many children lost one tooth?

- 3
- 9
- 16
- 7

5. A farmer counts her cows, goats, and chickens.

Animals in the Yard	
	III
	IIII
	IIII III

Animals in the Yard	
Cows	
Goats	
Chickens	

Part A

How many more chickens are there than cows?

There are _____ more chickens than cows.

Part B

Which type of animal are there the fewest of?




- cows
- goats
- chickens

Part C

How many cows, goats, and chickens are there in all?

- 8
- 11
- 13
- 16

6. Suzie and her friends choose their favorite fruit. They can choose from apples, oranges, or bananas. Each friend chooses one kind of fruit. Suzie makes a tally chart of the results.

Favorite Fruits	
Fruit	Tally
	
	
	

Part A

Make a picture graph that shows Suzie's tally chart.

Favorite Fruits					
Apple					
Orange					
Banana					

Part B

How many friends choose a fruit?

_____ friends

Part C

Circle the fruit that is chosen the most.

Apple Orange Banana

How can you tell by the graph?

There are more pictures of _____.