


In Summer



It is hot in the summer. You can swim in the water to cool off. You can wear shorts, t-shirts, and sunglasses. You can play games outside like baseball and soccer. It is fun.

1. What does it feel like in the summer?

- (A) cold
- (B) hot
- (C) wet

2. What do you wear?

- (A) jackets
- (B) gloves and hats
- (C) shorts and sunglasses

3. What can you do to cool off?

- (A) swim in the water
- (B) run really fast
- (C) play games

4. What is your favorite part about summer?

Making Cookies (hw) 6/8



Sally likes to help her mom make cookies. She helps put the flour into the bowl. She helps stir the batter. She likes licking the beater. The best part is eating the cookies when they are done.

1. Who likes to make cookies?

- (A) Sam
- (B) Sally
- (C) Sarah

2. What does she stir?

- (A) the flour
- (B) the sugar
- (C) the batter

3. What is the best part?

- (A) pouring the flour
- (B) eating the cookies when they are done
- (C) stirring the batter

4. Do you ever bake or cook with someone? What do you make?

Clouds

hw

6/9






Zachary likes to look at white fluffy clouds in the blue sky. Sometimes he likes to find pictures in the clouds. Look! That cloud looks like a turtle.

- Who likes to look at white fluffy clouds?
 - Jeremy
 - Zachary
 - Logan
- What does he like to find in them?
 - numbers
 - pictures
 - people
- What does one of the clouds look like?
 - a train
 - a boat
 - a turtle
- Have you seen a cloud that looked like something? What was it?

Name _____ Date _____

Give the best answer for each question.

1. Nicholas drew a closed shape with 4 sides. Choose any shapes he could have drawn.

- 
- 
- 

2. Draw a dot at each corner. Write how many sides and corners.



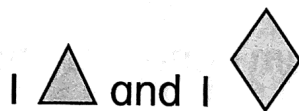
Sides: _____

Corners: _____


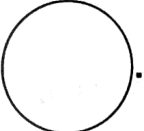
3. Is a shape with 2 sides open or closed? Draw a picture to show your answer.



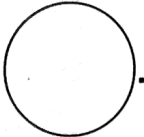
- closed
- open

4. What different shape can you make using a triangle and a rhombus?

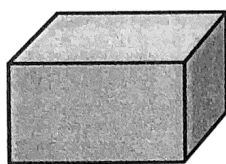


Use pattern blocks to help. Draw a picture.

5. Use  to make .


  make 1 .

6. Circle the real objects shaped like the solid shape.



Rectangular prism



7. Which real objects are shaped like a ?


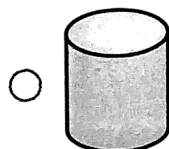
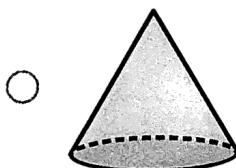
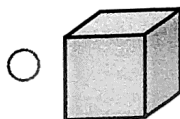
ball

box

ice cream cone

marble

8. Sue drew a solid shape with 1 flat surface.
Choose any shapes she could have drawn.

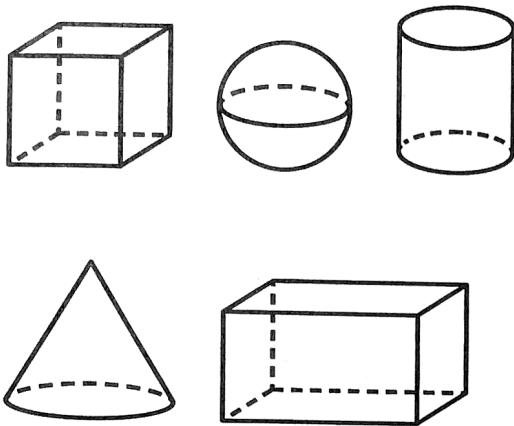


Name _____

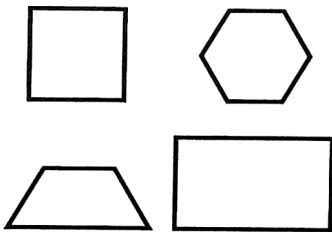
Date _____

9. Color blue any shape you could use to trace a circle.

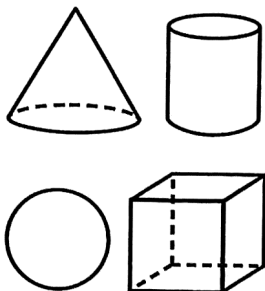
Color red any shape you could use to trace a square.



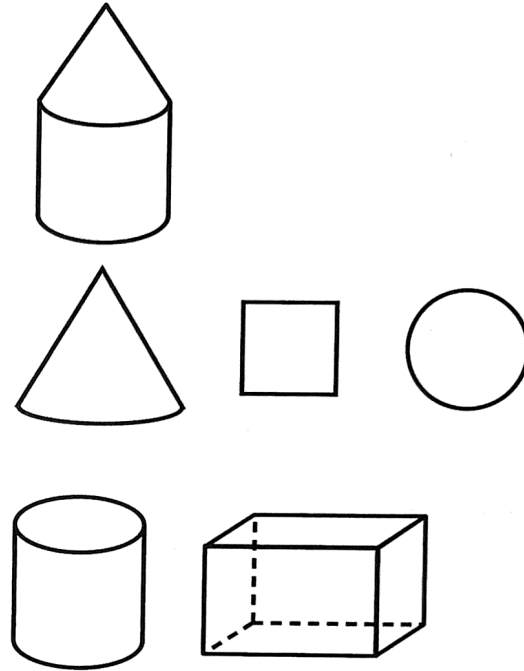
10. Color all the shapes with 4 sides.




11. Color all the shapes with no corners.



12. Color the shapes that make the figure shown.



13. Ahmed was making a new shape using  pieces.

He wants the shape to look like a .

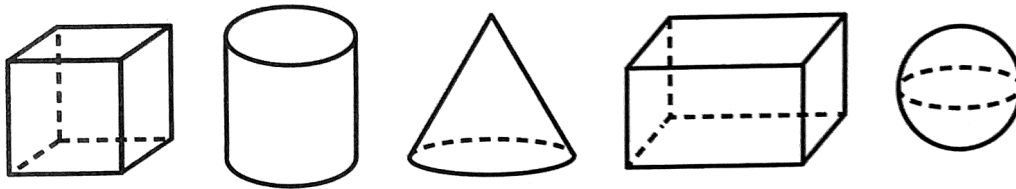
How many pieces does he need to make the new shape?

_____  pieces

14. Omar has a square yard for his chickens.
Each side is made of a piece of fence.
How many pieces of fence does he need?

_____ pieces of fence

15. Rachel found a box of toys in the closet.
She wants to give her baby sister all of the shapes
with curved sides. Color the toys she will give
her sister.



16. Walter traced a solid shape to make this picture.
What shape did Walter trace?

